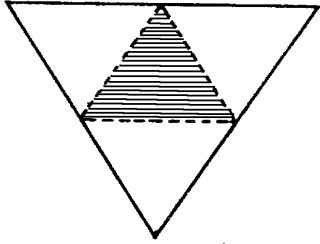
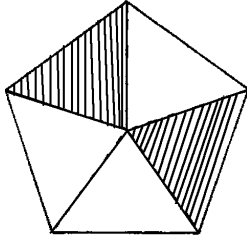
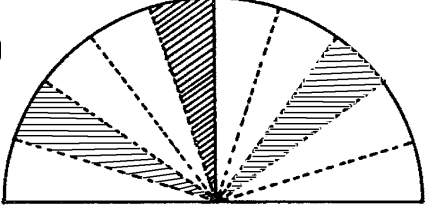
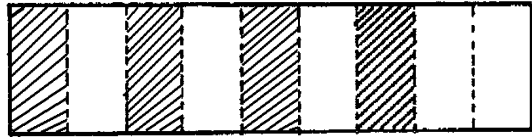
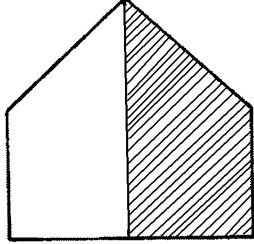
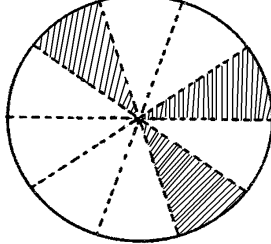
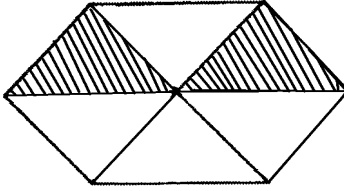
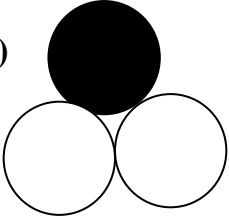

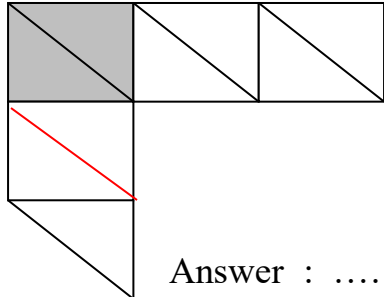


ANSWER SHEET

What **fraction** is **not shaded (UNSHADED)** in each of the following diagrams?

<p>(a) </p> <p>Answer : $\frac{3}{4}$</p>	<p>(b) </p> <p>Answer : $\frac{3}{5}$</p>
<p>(c) </p> <p>Answer : $\frac{7}{10}$</p>	<p>(d) </p> <p>Answer : $\frac{5}{9}$</p>
<p>(e) </p> <p>Answer : $\frac{1}{2}$</p>	<p>(f) </p> <p>Answer : $\frac{7}{10}$</p>
<p>(g) </p> <p>Answer : $\frac{4}{6}$</p>	<p>(h) </p> <p>Answer : $\frac{2}{3}$</p>
<p>(i) </p> <p>Answer : $\frac{5}{12}$</p>	<p>(j) </p> <p>Answer : $\frac{7}{9}$</p>